



Assignment #0.3: World Maps

Contemporary World

Key concepts

- World maps
- Important countries
- Important capital cities

Description

Students will demonstrate their knowledge of the world geography by correctly labelling important countries on outline maps.

Instructions

Using the maps attached to this assignment, complete the tasks below.

Due date: _____

The assignment is due on the date indicated above. As stated in the course outline, there will be a 10% penalty for every day it is late. The assignment will not be accepted after 3 days of the due date (weekends will count for 1 day).

TASK #1: Map of the Middle East

A) Identify the following countries on the Middle East map.

- Lebanon
- Iraq
- Israel
- Jordan
- Syria
- Irak
- Iran
- Saudi Arabia
- West Bank

B) Colour countries in the Middle East that are presently involved in a conflict or have been identified as a threat to the democratic world.

TASK #2: Map of Europe

A) Identify the following countries on the map of Europe.

- United Kingdom (UK)
- France
- Spain
- Portugal
- Germany
- Austria
- Czech Republic
- Slovenia
- Hungary
- Ukraine
- Croatia
- Romania
- Bulgaria
- Former Yugoslavia Republic of Macedonia (a.k.a. *FYROM* or *Republic of Macedonia*)
- Greece
- Sweden
- Finland
- Norway

B) Colour countries that were satellites of the former USSR (part of the East bloc countries).

TASK #3: Map of South America

Identify on the map of South America the following countries.

- Brazil (*Brasil* if you're Brazilian)
- Argentina
- Chile
- Peru
- Columbia
- Ecuador
- Venezuela
- Uruguay

TASK #4: Map of Africa

A) Identify on the map of Africa the following countries.

- South Africa
- Egypt
- Ethiopia
- Libya
- Sudan
- Somalia
- Rwanda
- Angola
- Botswana
- Democratic Republic of Congo
- Nigeria
- Ghana
- Mali

B) Colour countries that have been identified with genocide.

C) Colour countries that have recently undergone massive hunger.

TASK #5: Map of Asia

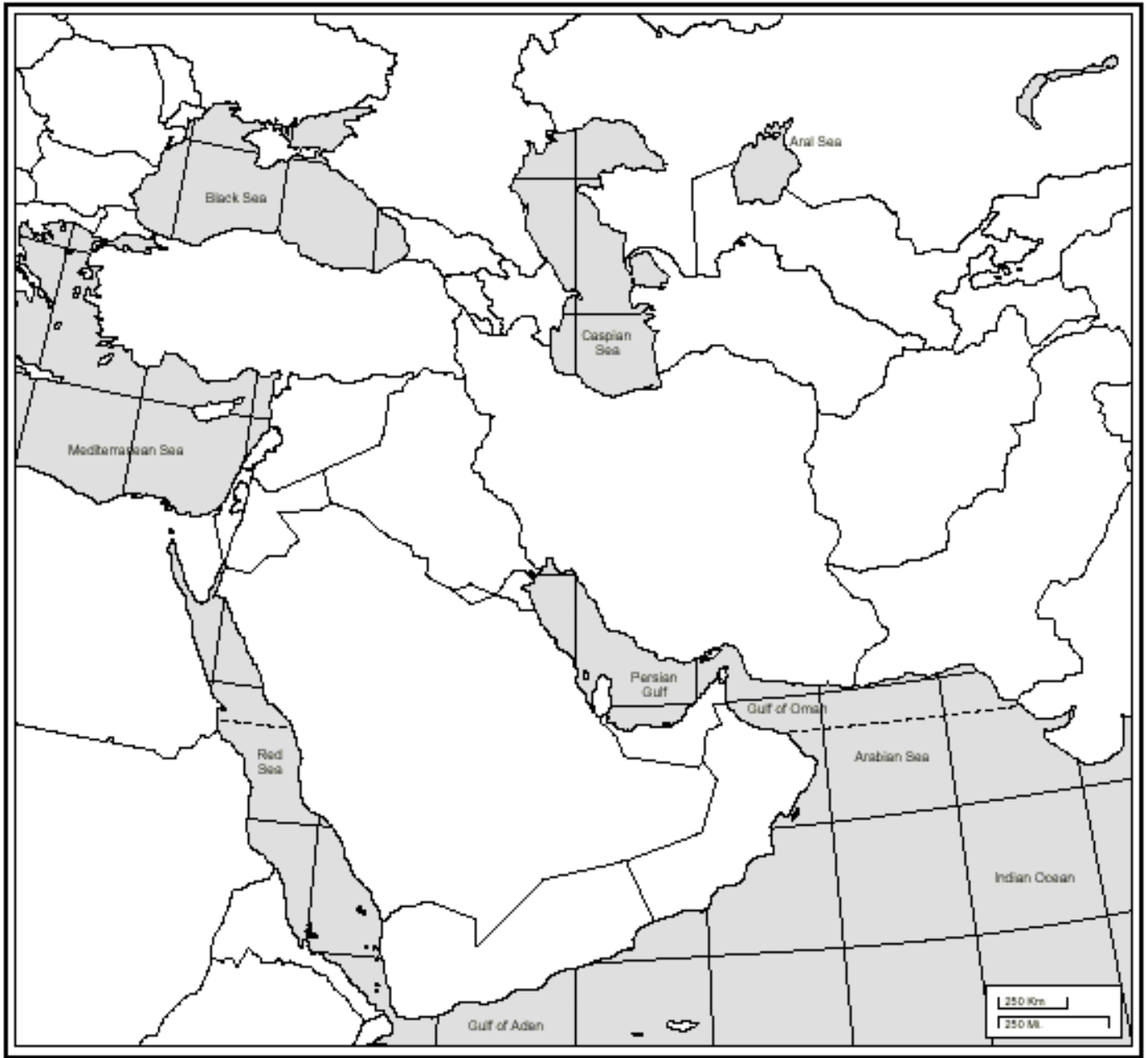
A) Identify the following countries on the map of Asia.

- China
- India
- Japan
- North Korea
- Vietnam
- Burma (a.k.a. Myanmar)
- Indonesia
- Taiwan

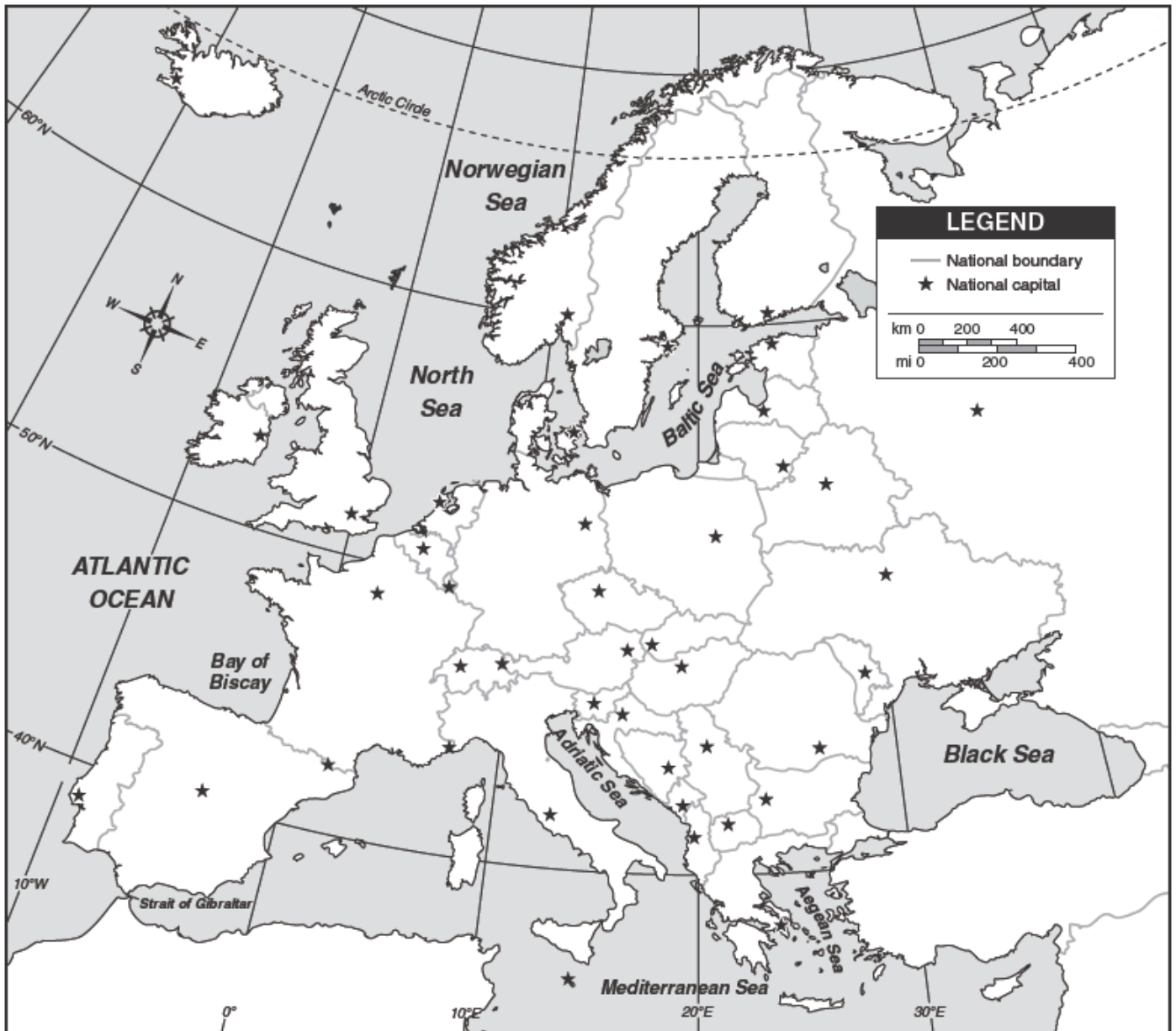
B) Colour the two countries in Asia with the largest population in the world.



Middle East



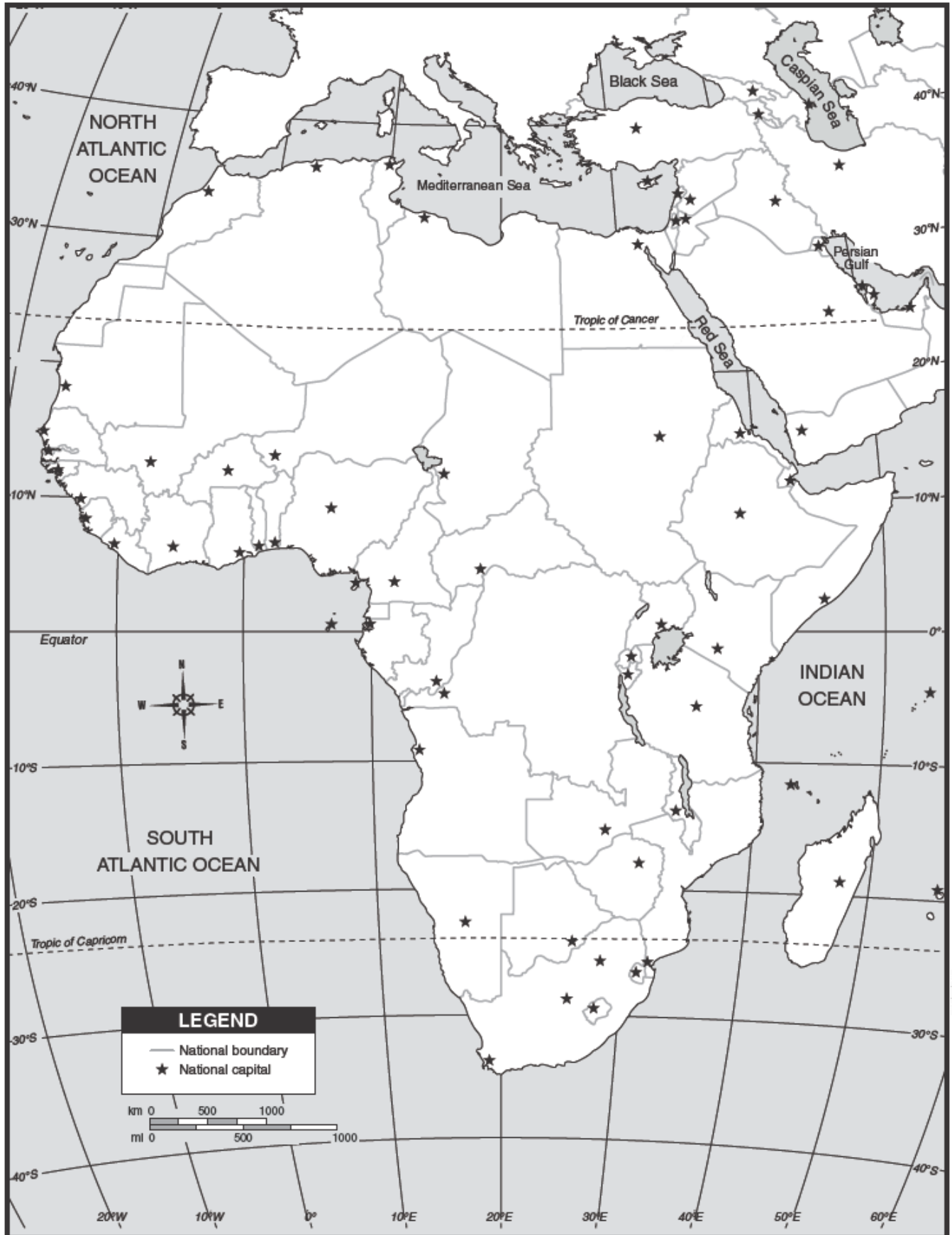
Europe



South America



Africa



Asia

